


Name: _____


Draw the clock hands to show the passage of time.

1.




What time will it be in 4 hours 46 minutes?

2.




What time will it be in 1 hour 11 minutes?

3.




What time will it be in 1 hour 28 minutes?

4.




What time will it be in 4 hours 12 minutes?

5.




What time will it be in 1 hour 57 minutes?

6.




What time will it be in 1 hour 19 minutes?

7.




What time will it be in 3 hours 38 minutes?

8.




What time will it be in 4 hours 27 minutes?

9.



What time will it be in 1 hour 4 minutes?

10.



What time will it be in 5 hours 51 minutes?